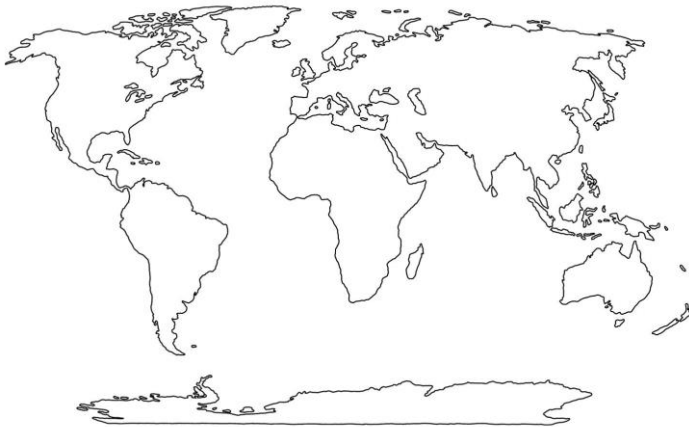




Episode 1

How long ago did this group live? _____

Use the map below to mark the areas where this group has been found.



Using the space below, write down three interesting facts about the hominins that you learned today:

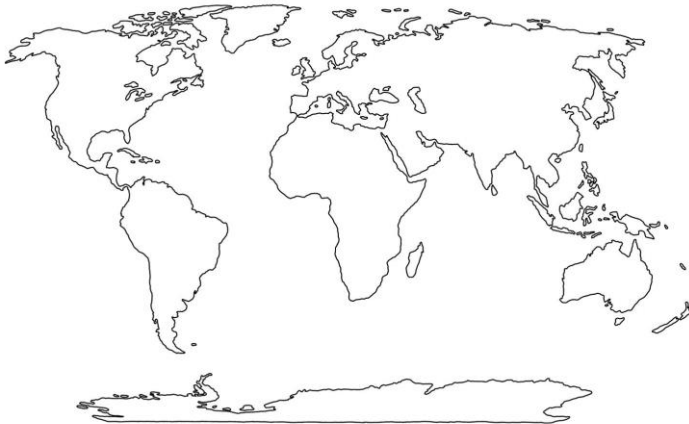


Episode 2

Scientific name: _____

How long ago did this species live? _____

Use the map below to mark the areas where this species has been found.



Using the space below, write down three interesting facts about this species that you learned today:

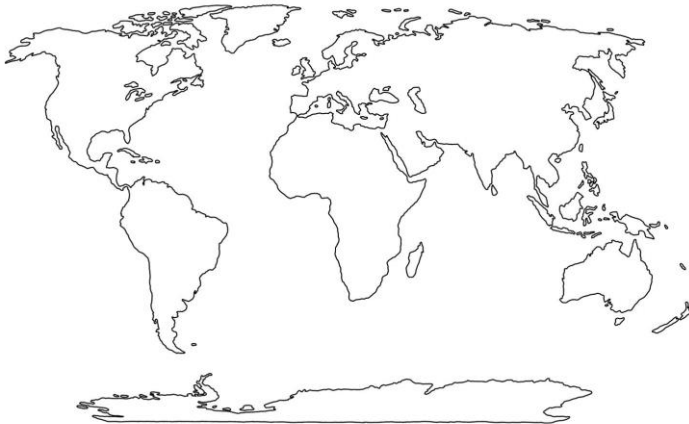


Episode 3

Scientific name: _____

How long ago did this species live? _____

Use the map below to mark the areas where this species has been found.



Using the space below, write down three interesting facts about this species that you learned today: